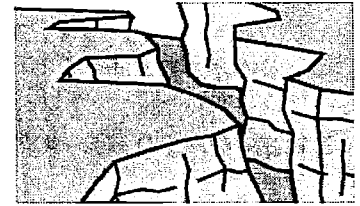



Name: _____

Landform Matching



Match each landform listed below with its description.

- | | |
|--------------------|--|
| _____ 1. plain | a. area of land that is completely surrounded by water |
| _____ 2. plateau | b. large, flat area of land |
| _____ 3. peninsula | c. area of flat land that is higher than the land around it |
| _____ 4. island | d. narrow strip of land with water on both sides that connects two large areas of land |
| _____ 5. isthmus | e. strip of land that sticks out into a body of water; area of land mostly surrounded by water |

Here are more landforms.
Match each with its description.

- | | |
|-------------------|---|
| _____ 6. mountain | f. an opening in the earth's crust from which lava flows |
| _____ 7. hill | g. large mound of land with a rounded top; smaller than a mountains |
| _____ 8. volcano | h. a large crack in the ground made by a river or a series of earthquakes |
| _____ 9. valley | i. large, tall mass of rock with steep sides; taller than hills |
| _____ 10. canyon | j. low land between hills or mountains |

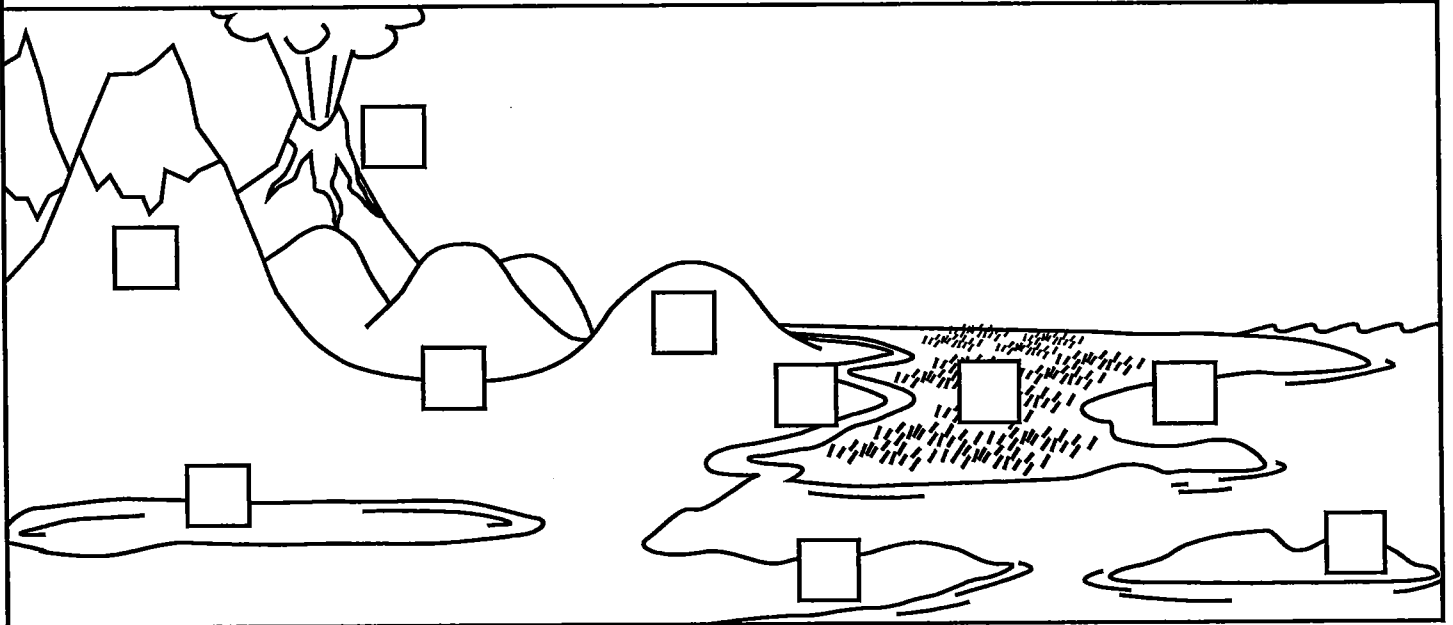
Name: _____

Land and Water Formations

Match each definition to its land or water formation.

- | | |
|---|-----------------|
| a. an opening in the earth's crust from which lava flows | _____ river |
| b. mound of earth with a rounded top; smaller than a mountain | _____ bay |
| c. a thin natural waterway that allows water to flow into a lake or ocean | _____ island |
| d. thin strip of land that extends into a body of water | _____ mountain |
| e. low land between hills or mountains | _____ plain |
| f. a large natural area of water surrounded by land | _____ lake |
| g. large, tall rock that extends into the air; taller than a hill | _____ peninsula |
| h. a natural area of water that is mostly surrounded by land | _____ valley |
| i. a large area of flat land or gently rolling land | _____ volcano |
| j. area of land that is completely surrounded by water | _____ hill |

On the picture, color the land and water. Write the letter of each formation on the picture.



Landform Review Part II

1. Write at least three sentences to compare and contrast an island to a peninsula.

2. Which of the following landforms is described as a natural hollow space found in the Earth?

- a. canyon
- b. delta
- c. valley
- d. cave

3. Look at the map to the below.



How are the Gulf of Mexico and Hudson Bay similar?

4. Which of the following landforms in Ohio has the highest elevation?

- a. Grand Lake
- b. Campbell Hill
- c. Lake Plains
- d. Mt. Rushmore

5. Which of the following is NOT a landform found in Ohio?

- a. Seneca Caverns
- b. Campbell Hill
- c. Grand Lake
- d. Lake Ontario

6. In three or more sentences, compare and contrast the Allegheny Plateau and the Allegheny mountains.

7. What landform did the Hawaiian Islands begin as? _____

8. The oceans hold what percent of the world's water?

- a. 50%
- b. 60%
- c. 75%
- d. 90%