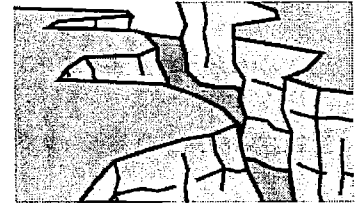



Name: Answer Key

Landform Matching



Match each landform listed below with its description.

b 1. plain

c 2. plateau

e 3. peninsula

a 4. island

d 5. isthmus

a. area of land that is completely surrounded by water

b. large, flat area of land

c. area of flat land that is higher than the land around it

d. narrow strip of land with water on both sides that connects two large areas of land

e. strip of land that sticks out into a body of water; area of land mostly surrounded by water

Here are more landforms.
Match each with its description.

i 6. mountain

g 7. hill

f 8. volcano

j 9. valley

h 10. canyon

f. an opening in the earth's crust from which lava flows

g. large mound of land with a rounded top; smaller than a mountains

h. a large crack in the ground made by a river or a series of earthquakes

i. large, tall mass of rock with steep sides; taller than hills

j. low land between hills or mountains

Name: _____

Land and Water Formations

Match each definition to its land or water formation.

a. an opening in the earth's crust from which lava flows

b. mound of earth with a rounded top; smaller than a mountain

c. a thin natural waterway that allows water to flow into a lake or ocean

d. thin strip of land that extends into a body of water

e. low land between hills or mountains

f. a large natural area of water surrounded by land

g. large, tall rock that extends into the air; taller than a hill

h. a natural area of water that is mostly surrounded by land

i. a large area of flat land or gently rolling land

j. area of land that is completely surrounded by water

c river

h bay

j island

g mountain

i plain

f lake

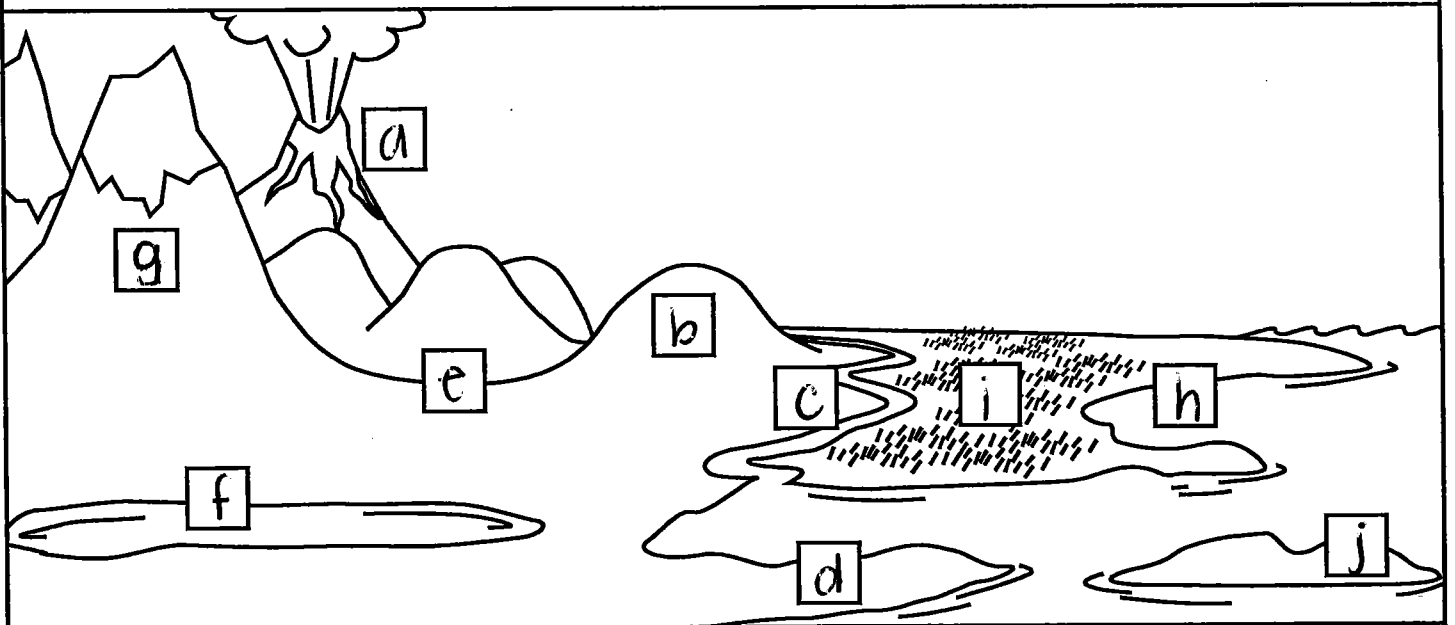
d peninsula

e valley

a volcano

b hill

On the picture, color the land and water. Write the letter of each formation on the picture.



Landform Review Part II

(similar) (different)

1. Write at least three sentences to compare and contrast an island to a peninsula.

An island and a peninsula are similar because both landforms border water. One difference between an island and peninsula is that an island is completely surrounded by water while a peninsula is surrounded by water on three sides. Also, a peninsula is connected to land and an island is not.

2. Which of the following landforms is described as a natural hollow space found in the Earth?

a. canyon

b. delta

c. valley

d. cave

3. Look at the map to the below.



How are the Gulf of Mexico and Hudson Bay similar?

The Gulf of Mexico and the Hudson Bay are similar because both are bodies of water that are partly surrounded by land.

4. Which of the following landforms in Ohio has the highest elevation?

- a. Grand Lake
- b. Campbell Hill
- c. Lake Plains
- d. Mt. Rushmore

5. Which of the following is NOT a landform found in Ohio?

- a. Seneca Caverns
- b. Campbell Hill
- c. Grand Lake
- d. Lake Ontario

6. In three or more sentences, ^{(similar) (different)} compare and contrast the Allegheny Plateau and the Allegheny mountains.

The Allegheny plateau and the Allegheny mountains are similar because they are both higher than the land around it. The Allegheny mountains have steep sides and pointy tops. The Allegheny plateau is flatter than the mountains and less steep sides.

7. What landform did the Hawaiian Islands begin as? volcanoes

correction →

8. The oceans cover 70 % of the Earth's surface.

- a. 50%
- b. 60%
- c. 70%
- d. 90%